



PHOENIX PUBLIC SCHOOL
ISANPUR, AHMEDABAD - 382443.

Seat No. :

EXAM :

FA-4

DATE :

STD. / CLASS :

I

SUBJECT : FA4

MATHS REVISION

MAIN

1 +

Supplements

=

TOTAL

Supervisor's Sign.

Examiner's Sign.

Ques. No.

Total Marks

Marks Obtain

1

2

3

4

5

6

7

8

TOTAL

Write From Here / અહીંથી લખજું.

Maths FA4 paper style:

Total Marks = 30.

Course: 1-3, 4

PART-A

Q.1. MCQ = 10M

PART-B

Q.1. Blanks = 5M

Q.2. Draw hands to show the time = 5M

Q.3. Look at the clock and write the time = 5M

Q.4. Match the following = 5M.

PART-A. [2]

Q.1. MCQs:- (10M) + =

1) How many months are there in a year?
a. 10 b. 14 c. 12 d. 8

2) Which is the sixth month of a year?
a. May b. June c. July d. August

3) How many days are in the month of February in a leap year?
a. 28 b. 27 c. 30 d. 29

4) Which day comes before Tuesday?
a. Wednesday b. Monday
c. Thursday d. Friday

5) How many days are there in the month of March?
a. 30 b. 31 c. 28 d. 29

6) Which is the third month of a year?
a. April b. June
c. March d. May

7) Which day comes before Monday?
a. Wednesday b. Sunday
c. Thursday d. Tuesday

8) 1 Rupee = _____ paise.
a. 50 b. 10 c. 100 d. 1000

9) What is the value of ₹ 5 × 2 = _____
a. ₹ 10 b. ₹ 7 c. ₹ 3 d. ₹ 4

□ + □ + □ + □ + □ = □





પ્રશ્ન
સંખ્યા
ક્રમિક

10) What is the time when the small hand is at 2 and long hand at 12?
a. 2'o clock b. 5'o clock
c. 12'o clock d. 1'o clock

11) A year has _____ Monday.
a. 12 b. 30 c. 52 d. 31

12) December has _____ days.
a. 28 b. 30 c. 31 d. 29

13) How many months end with the letters 'ber'?
a. 2 b. 3 c. 4 d. 5

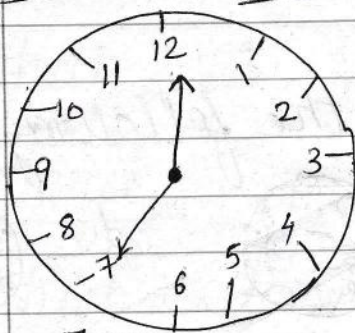
14) Tick (✓) the ₹2 in the following figures?
a.  b.  c.  d. 

15) Tick (✓) the ₹1 coin in the following figures?
a.  b.  c.  d. 

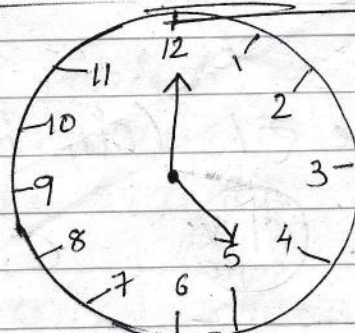
Q.1. Fill in the blanks: (5m)

- 1) Tuesday is the third day of the week.
- 2) June has 30 days.
- 3) In a leap year february has 29 days.
- 4) Christmas is celebrated in the month of December.
- 5) Saturday is the last day of week.
- 6) Sunday is fun day.
- 7) The value of $3 \times 1 = \underline{3}$

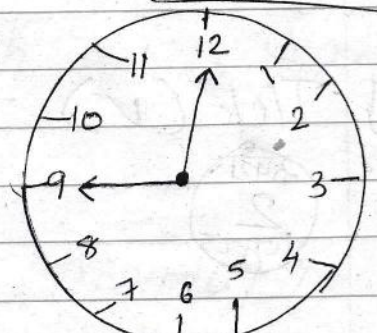
Q.2. Draw hands to show the time. (5m)



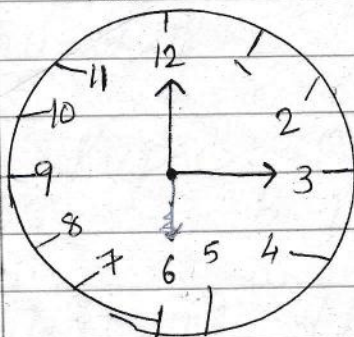
7:00



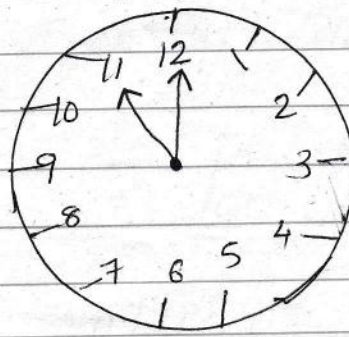
5:00



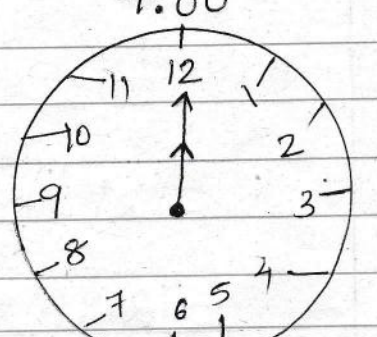
9:00



3:00



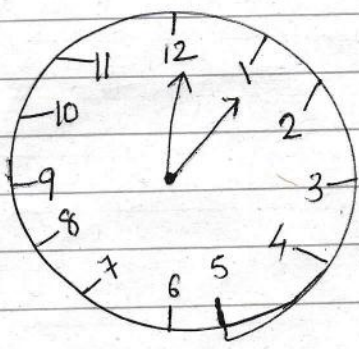
11:00



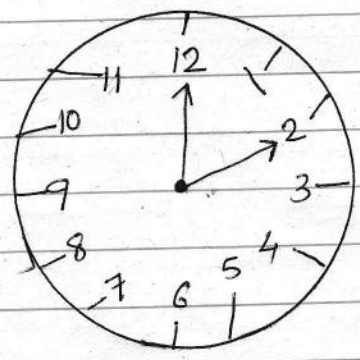
12:00

Handwritten notes in the top left corner.

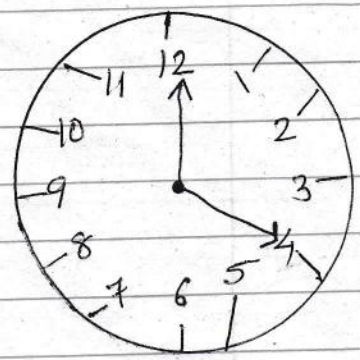
Q.3. Look at the clocks and write them...



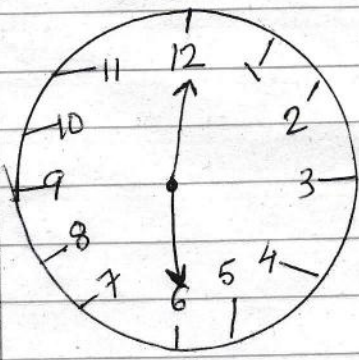
1:00



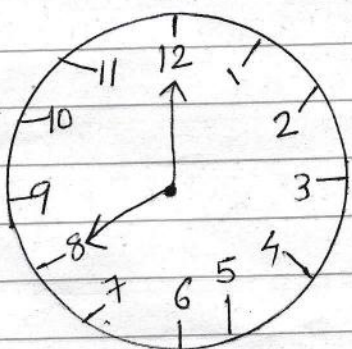
2:00



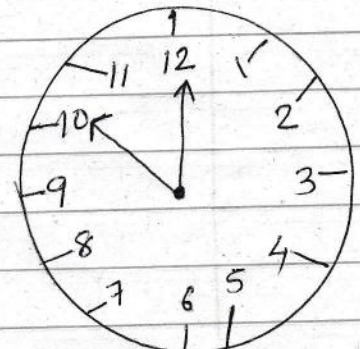
4:00



6:00



8:00



10:00

Q.4.

Match the followings :- (5m)


1. ₹ 1 =



2. ₹ 10 =




3. ₹ 100 =



4. 50 p =



5. ₹ 50 =



6. leap year = February

7. Sundays = 52